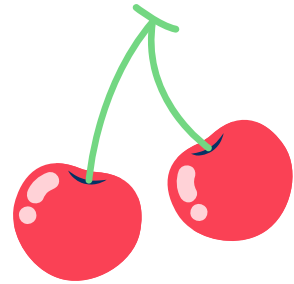





Направи си мелба

$1+1=$



$3-2=$




$2+1=$





Направи си мелба

$$2 - 1 = \square$$



$$1 + 2 = \square$$



$$3 - 1 = \square$$





Направи си мелба

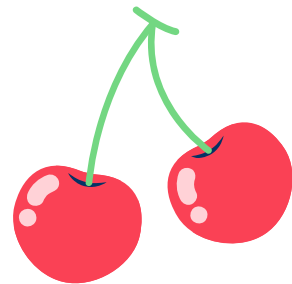
$$1 + 2 = \square$$



$$2 + 1 = \square$$




$$3 - 1 = \square$$





Направи си мелба

$$2 + 1 = \square$$



$$3 - 2 = \square$$




$$1 + 1 = \square$$






Направи си мелба

$$3 - 2 = \square$$






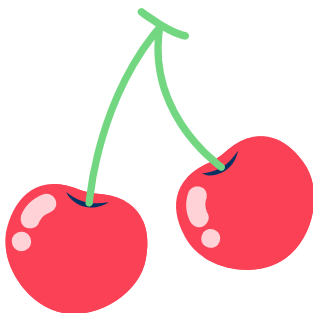



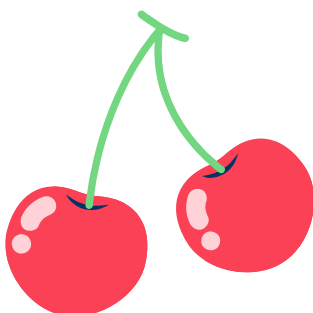


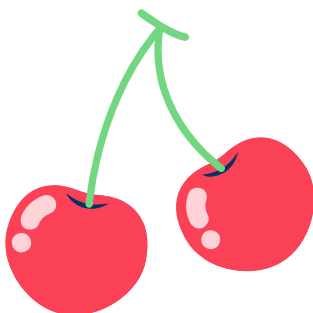
$$1 + 1 = \square$$



$$3 - 1 = \square$$









$$\begin{array}{r} 2 \\ + 1 \\ \hline \end{array}$$

$$\begin{array}{r} 3 \\ - 1 \\ \hline \end{array}$$

$$\begin{array}{r} 1 \\ + 2 \\ \hline \end{array}$$

$$\begin{array}{r} 3 \\ - 2 \\ \hline \end{array}$$

$$\begin{array}{r} \\ + \\ \hline \end{array}$$

$$\begin{array}{r} \\ - \\ \hline \end{array}$$

$$\begin{array}{r} \\ + \\ \hline \end{array}$$

$$\begin{array}{r} \\ - \\ \hline \end{array}$$


$$\begin{array}{r} 2 \\ + 1 \\ \hline \end{array}$$

$$\begin{array}{r} 3 \\ - 1 \\ \hline \end{array}$$

$$\begin{array}{r} 1 \\ + 2 \\ \hline \end{array}$$

$$\begin{array}{r} 3 \\ - 2 \\ \hline \end{array}$$

$$\begin{array}{r} \\ + \\ \hline \end{array}$$

$$\begin{array}{r} \\ - \\ \hline \end{array}$$

$$\begin{array}{r} \\ + \\ \hline \end{array}$$

$$\begin{array}{r} \\ - \\ \hline \end{array}$$



	✓	✓✓	✓✓✓
1.			
2.			
3.			
4.			

	✓	✓✓	✓✓✓
1.			
2.			
3.			
4.			

	✓	✓✓	✓✓✓
1.			
2.			
3.			
4.			

	✓	✓✓	✓✓✓
1.			
2.			
3.			
4.			

	✓	✓✓	✓✓✓
1.			
2.			
3.			
4.			

	✓	✓✓	✓✓✓
1.			
2.			
3.			
4.			

	✓	✓✓	✓✓✓
1.			
2.			
3.			
4.			

	✓	✓✓	✓✓✓
1.			
2.			
3.			
4.			

	✓	✓✓	✓✓✓
1.			
2.			
3.			
4.			

	✓	✓✓	✓✓✓
1.			
2.			
3.			
4.			

