

Попълнете правилно изразите, така че да са верни.

$$3 + \square = \square$$

$$\square + \square = \square$$






Попълнете правилно изразите, така че да са верни.

$$3 + \square = \square$$




$$\square + \square = \square$$

Помогни на Зайо да разбере колко моркова трябва да има.







-

=







-

=




-

=




-

=

